

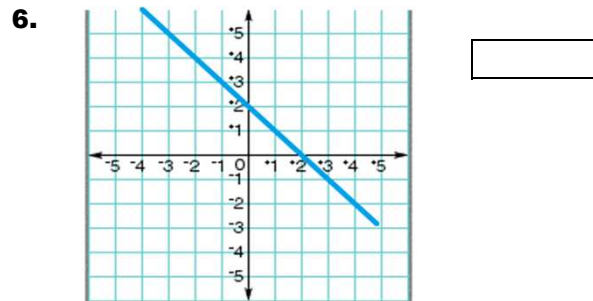
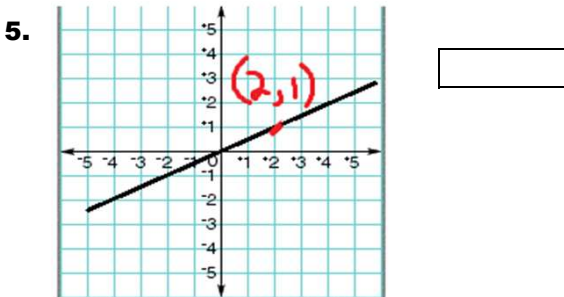
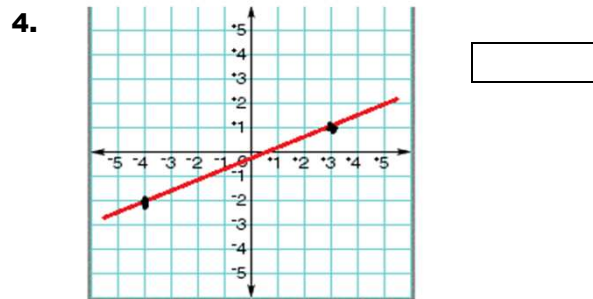
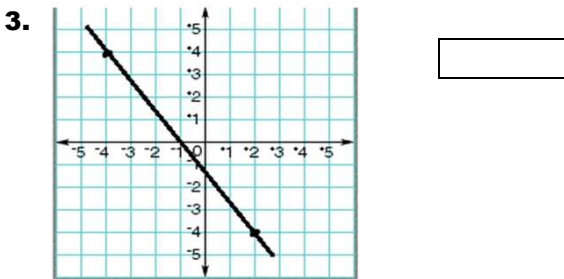
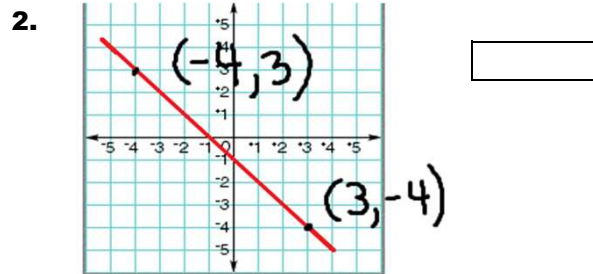
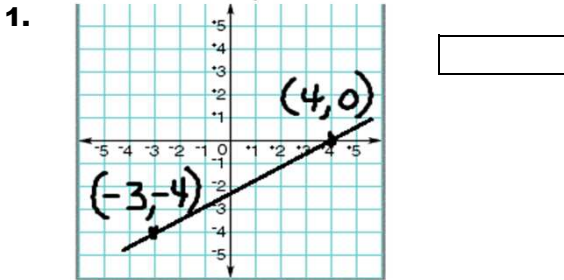
MasterMath

Name _____

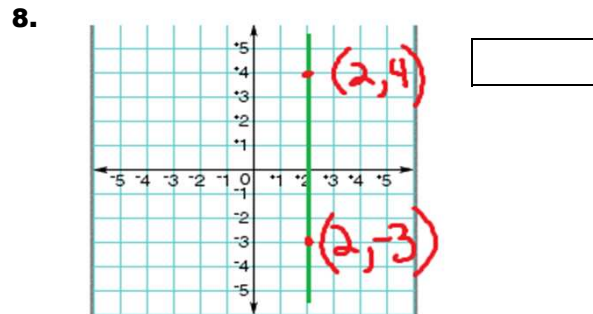
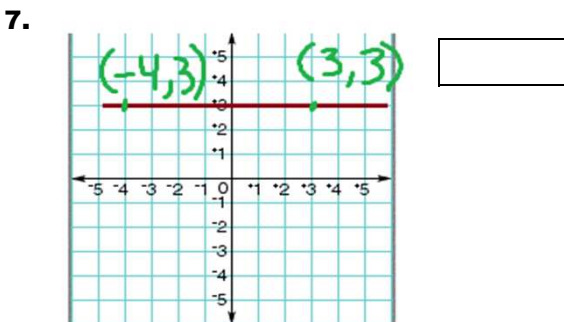
Date _____

Slope

Find the slopes of these lines



TRUST YOUR ANSWER ON THESE NEXT TWO



Find the slope for a line that contains these points

9.

Point 1	Point 2	Slope
(-2, 3)	(4, 4)	
(16, 6)	(11, 4)	
(6, 3)	(-6, -3)	
(4, 5)	(7, 8)	

10.

Point 1	Point 2	Slope
(6, 7)	(4, 4)	
(11, -2)	(12, -4)	
(5, 8)	(3, 9)	
(26, 11)	(4, -5)	